



The actual test paper has 35 questions. Time allowed : 60 minutes. There are 3 sections: 5 questions in section I, 10 in section II and 20 in section III.

SYLLABUS

Section – I (Mental Ability) : Numerals and Number Names (4 digit Numbers), Addition, Subtraction, Fractions, Multiplication, Division, Time, Temperature, Straight and Curved Lines, Calendar, Measurement of Length, Weight and Capacity, Geometrical Shapes, Money.

Section – II (Logical and Analytical Reasoning) : Problems Based on Figures, Odd One Out, Series Completion, Coding-Decoding, Mathematical Reasoning, Analytical Reasoning, Mirror Images, Embedded Figures.

Section – III (Computers and IT) : Fundamentals of Computer, General Information about Computers, Storage Devices, Parts of Computer, Uses of Computer, Input and Output Devices, Introduction to Internet, MS-Paint, Introduction to MS-Word, Latest Developments in the field of IT.

Questions are based on Windows 7 and MS-Office 2010.




The actual test paper has 35 questions. Time allowed : 60 minutes. There are 2 sections: 10 questions in section I and 25 in section II.

SYLLABUS

Section – I (Mental Ability) : Numerals, Number Names and Number Sense (4 digit numbers), Addition, Subtraction, Fractional Numbers, Multiplication, Division, Time, Straight and Curved Lines, Calendar, Measurement of Weight and Capacity, Geometrical Shapes, Money, Patterns, Problems Based on Figures, Odd One Out, Series Completion, Coding-Decoding, Mirror Image, Embedded Figures.

Section – II (Science) : Plants and Animals, Human Body, Water, Food, House and Occupation, Transport and Communication, Matter and Materials, Earth and Universe, Birds, Light, Sound and Force.



The actual test paper has 35 questions. Time allowed : 60 minutes. There are 3 sections: 10 questions in section I, 15 in section II and 10 in section III.

Section – I : Logical Reasoning **Section – II** : Mathematical Reasoning

Section – III : Everyday Mathematics

SYLLABUS

Numerals and Number Name, Number Sense (4 digit numbers), Addition, Subtraction, Multiplication, Division, Fractions, Money, Length (conversions), Weight, Capacity, Time, Point, Problems Based on Figures, Odd One Out, Patterns, Series Completion, Coding-Decoding, Mirror Images, Embedded Figures, Straight Lines and Curved Lines, Geometrical Shapes.



The actual test paper consists of 35 questions. Time allowed : 60 minutes. There are 3 sections.

SYLLABUS

Section-I: Word and Structure Knowledge : Adverbs, Prepositions, Pronouns (possessive, demonstrative, etc.), Simple tenses, Irregular verbs, Modals (of ability and permission, etc.), Basic questions, etc. Collocations, Spellings, Words related to animals, Household things, Clothes, Basic emotions, Food, Animals and Pets, etc.

Section-II: Reading : Search for and retrieve information from various text types like stories, Anecdotes, etc. Understand information through pictures, Time-table format, etc., Acquire broad understanding of and look for specific information in short texts like messages, Invitations, etc.

Section-III: Spoken and Written Expression : Ability to understand situation-based variations in functions like apology, greeting, introduction, request, etc.

IN ASSOCIATION WITH





National Cyber Olympiad

MENTAL ABILITY

1. The fraction of unshaded part is _____.



(A) $\frac{2}{3}$

(B) $\frac{1}{3}$

(C) $\frac{1}{2}$

(D) $\frac{3}{2}$

2. In one trip a car can take 6 people. In how many trips can it take 30 people?

(A) 5 trips

(B) 6 trips

(C) 4 trips

(D) 10 trips

3. Raman had 28 balloons. In a party, 8 balloons burst. How many are left with him?

(A) 20

(B) 21

(C) 25

(D) 18

4. $2 + 3 + 16 = 10 + \square$

(A) 9

(B) 21

(C) 10

(D) 11

LOGICAL AND ANALYTICAL REASONING

5. If \oplus means +, \odot means -, \uparrow means >, \downarrow means <, then which of the following is NOT true?

(A) $2 \oplus 5 \uparrow 4$

(B) $5 \odot 3 \downarrow 7$

(C) $10 \oplus 5 \uparrow 5$

(D) $4 \odot 2 \uparrow 7$

6. Find the odd one out.

(A) Sunday

(B) January

(C) Wednesday

(D) Friday

7. In which one of the following numbers, the digits cannot be rearranged to get another three digit number?

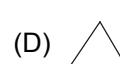
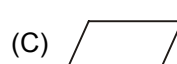
(A) 400

(B) 425

(C) 968

(D) 129

8. Find odd one out.



COMPUTERS AND INFORMATION TECHNOLOGY

9. In MS-Word, what tab of the ribbon do you need to be on, to see the document views that are available?

(A) View

(B) Home

(C) Page Layout

(D) Insert

10.  represents which part of computer ?

(A) Keyboard

(B) Mouse

(C) CD

(D) CPU

11. Which of the following statements about a computer is NOT correct?

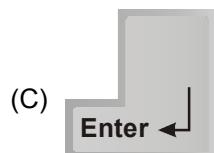
(A) You can watch movies on it.

(B) You can solve your sums on it.

(C) You can play games on it.

(D) You can cook food with it.

12. The key that erases characters towards the left is _____.



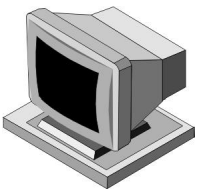
13. Find the odd term out.

(A) Keyboard

(B) Mouse

(C) Monitor

(D) Joystick

14.  is also called _____.

(A) VDU (B) CPU (C) ALU (D) CU

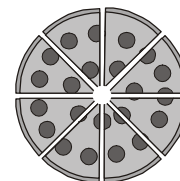
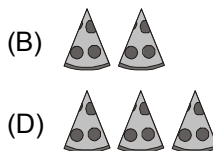

15. MS-Paint is a windows program that is used for _____.
- (A) Calculations (B) Writing letters
(C) Drawing purposes (D) Preparing presentations



National Science Olympiad

MENTAL ABILITY

1. If Rahul puts exactly 2 fish in each fishbowl, how many fish will he use to put in 20 bowls ?
(A) 40 (B) 22 (C) 42 (D) 20
2. Which is true ?
(A) $6,293 > 4,526$ (B) $4,521 < 4,297$ (C) $6,113 > 6,169$ (D) $6,750 = 6,150$
3. Which means seven thousand five hundred ninety-two ?
(A) 7,592 (B) 5,792 (C) 5,972 (D) 7,529
4. Reena ate $\frac{1}{8}$ of the cake. How much of the cake did she eat ?



5. The chart shows the number of pages Mansi read during four days.

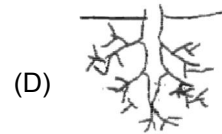
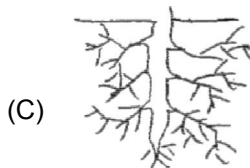
Day	Monday	Tuesday	Wednesday	Thursday
Pages Read	24	17	31	26

How many more pages did Mansi read on Wednesday than on Tuesday ?

(A) 26 (B) 16 (C) 14 (D) 24

SCIENCE

6. Solar energy comes from
(A) The sun (B) Tides (C) Oil (D) Fossils
7. Water droplets that are too heavy to float make
(A) Fog (B) Clouds (C) Rain (D) Smoke
8. Which of the following does not take the shape of the container it is in ?
(A) Pencil (B) Oil (C) Water (D) Milk
9. The figures below show the roots of some plants. Which of the following will hold the plant most firmly to the soil ?



10. Ducks have
 (A) Short and broad beaks (B) Broad and flat beaks
 (C) Slender beaks (D) Pointed beaks
-
11. Look at the classification table shown. 'P' & 'Q' is correctly represented by _____.
- | | |
|---------------|--------------|
| P | Q |
| (A) Tomato | Chilli |
| (B) Mimosa | Dragon fruit |
| (C) Pineapple | Rubber |
| (D) Apple | Coconut |
-
-
12. I protect the brain. I consist of bones which are fused firmly together to form a shell-like structure. What am I?
 (A) Skull (B) Ribcage (C) Spine (D) Sternum
-
13. The bird that lays its eggs in the nest of a crow is
 (A) Cuckoo (B) Parrot (C) Wood pecker (D) Pigeon
-
14. Which of the following will not dissolve in water?
 (A) Salt (B) Sugar (C) Sand (D) Baking soda
-
15. Soil helps trees because soil —
 (A) Makes food for the trees (B) Moves the tree seeds to new places
 (C) Gives nutrients to the trees (D) Turns the roots into new trees

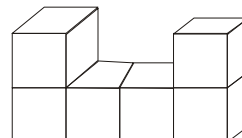


International Mathematics Olympiad

1. A class collected seven hundred fourteen box tops. Which number represents seven hundred fourteen?
 (A) 704 (B) 714 (C) 740 (D) 741
-
2. What is the standard form of $7,000 + 800 + 20 + 5$?
 (A) 7,285 (B) 7,825 (C) 7,852 (D) 7,528
-
3. Some students count 149 balls in the gym. What is another way of writing the number of balls in the gym?
 (A) Fourteen nine (B) One fourteen nine
 (C) One hundred forty-nine (D) One hundred fourteen nine
-
4. Which place value is used to prove that 5,487 is less than 5,874?
 (A) Ones place (B) Tens place (C) Hundreds place (D) Thousands place
-
5. Tina shades in 3 spaces on a game board. What fraction of the game board is shaded?
- | | | |
|--|--|--|
| | | |
| | | |

Game Board
- (A) $\frac{3}{6}$ (B) $\frac{3}{5}$
 (C) $\frac{3}{3}$ (D) $\frac{6}{3}$
-
6. What property of addition will help you find the answer to the problem: $6 + 0 = ?$
 (A) Zero plus any number equals to zero (B) Zero plus any number equals to that number
 (C) Zero minus any number equals to that number
 (D) Zero minus any number equals to zero
-
7. Sara and 3 of her friends together made a poster. They drew 8 rows of squares with 6 squares in each row. How many squares did Sara and her friends draw on the poster?
 (A) 48 (B) 42 (C) 40 (D) 17

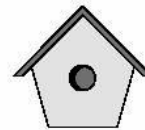
8. How would the given block model look from the top?



9. Komal built a birdhouse at summer camp.

What shape is the piece of wood that was cut out to make the door of her birdhouse?

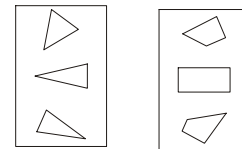
- (A) Triangle (B) Diamond
(C) Circle (D) Pentagon



10. Mrs. Ryan shows her class two groups of shapes.

Then she asks, "Which rule was used to sort these shapes into groups?"


- (A) Large things and small things
(B) Triangles and squares
(C) Circles and figures with 4 sides
(D) Triangles and figures with four sides



11. Jenny is weaving a pattern into a rug.

What would most likely come next?

- (A) ● ● ● ● ● ●
(B) ○ ○ ○ ○ ○ ○
(C) △ △ △ △ △ △
(D) ▼ ▼ ▼ ▼ ▼ ▼



12. Meena made this pattern with balls:



Which of the following uses a rule most different from Meena's pattern?

- (A) (B)
(C) (D)

13. If Pawan has baseball practice every fourth day in the month of March, starting with March 1, what date will be his last day of practice for the month?

- (A) March 28
(B) March 29
(C) March 30
(D) March 31

MARCH						
S	M	T	W	Th	F	S
				10	2	3
4	5	6	7	8	9	10
11	12	13	14	15	16	17
18	19	20	21	22	23	24
25	26	27	28	29	30	31

14. The rule for sorting is "has four or more corners." Which group has been sorted correctly?

- (A) (B)
(C) (D)

15. Third-grade students went to a theatre in 8 buses. Each bus took 45 students. How many students went to the theatre?

- (A) 320 (B) 360 (C) 380 (D) 3240

baby parrot to play with. And please don't forget to put in a good word for my friend with Santa! He is very nice. He doesn't keep me in a cage.

Lots of Love

Meethu

Now, choose the correct answer.

9. Meethu lives in

- (A) Hyderabad (B) Mumbai (C) A cage
-

10. Meethu asks for

- (A) Two things (B) Three things (C) Five things
-


11. Meethu asks Rudolf some things for

- (A) Christmas (B) Holi (C) Good Friday
-

12. Why does Meethu like his owner?

- (A) He doesn't give him food. (B) He puts Meethu in a cage.
(C) He allows Meethu to fly.
-

13. Find a sentence matching the picture.



- (A) The girl is posting a letter. A crow is looking at her.
(B) The girl is looking at the crow. The crow is posting a letter.
(C) The girl is buying vegetables. There is a post-box.

SPOKEN AND WRITTEN EXPRESSION

14. Find one sentence to complete the dialogue.

Geetha: Hello! I am Geetha! What is your name?

Lina : (A) Hello! I am Lina.

(B) Hello! I am going home.

(C) Let us go home.

15. Find one sentence to complete the paragraph.

Ram didn't want to swim in the sea.

He sat on the beach and watched Rahul and Mahesh.

(A) Mummy gave Ram an ice cream but he didn't want it.

(B) They played in the water.

(C) But Paul didn't want to.
